

Practice Test 2

DIRECTIONS

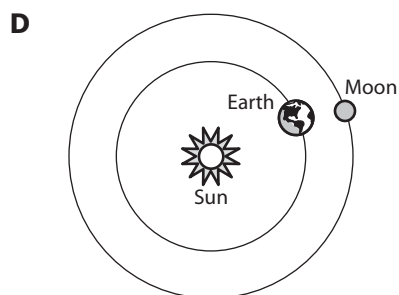
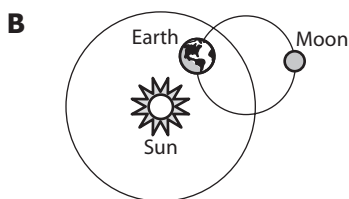
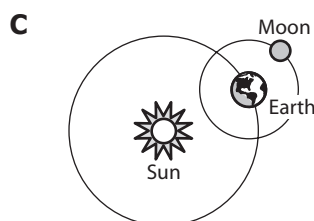
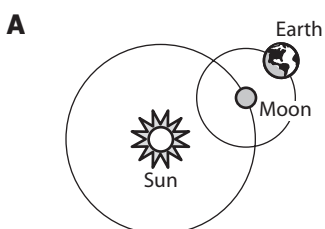
Read each question carefully and choose the best answer. Then mark the space in the answer booklet for the answer you have chosen.

SAMPLE

Which of the following would act to slow a ball rolling downhill?

- A** Air pressure
- B** Friction
- C** Gravity
- D** Mass

1 Which of these *best* shows the movement of the Moon and Earth?



2 Which of the following tools can be used to reflect light?

- F A prism
- G Binoculars
- H A hand-held mirror
- J Magnifying glass

3 Catherine wants to do an experiment to find out if too much water will kill a potted geranium. How should she state her hypothesis?

- A Will too much water kill a potted geranium?
- B If I water a potted geranium too much, then it will die.
- C Too much water can kill a potted geranium.
- D I will find out how too much water affects a geranium.

4 Which diagram *best* shows a series circuit?

