


Test
3

Practice Test

16

What is the area of the shaded figure below?



- (F) 18 square units
- (G) 22 square units
- (H) 26 square units
- (J) 40 square units

17

The table shows amount of time that Celeste practiced the piano on four days.

Piano Practice

Day	Minutes
Sunday	90
Monday	0
Tuesday	45
Wednesday	30

Which of the following statements about the amount of time Celeste practiced is true?

- (A) Celeste practiced 175 minutes altogether.
- (B) Celeste practiced more time on Sunday and Monday than she did on Tuesday and Wednesday.
- (C) Celeste practiced more on Wednesday than Tuesday.
- (D) Celeste practiced more time on Monday, Tuesday, and Wednesday combined than she did on Sunday.

Practice Test

**Test
3**

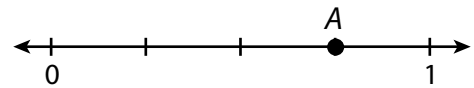
18

José has \$12 in bills. He does not have any \$2 bills. In how many different ways can he have \$12?

- (F) 2 ways
- (G) 3 ways
- (H) 4 ways
- (J) 5 ways

19

What fraction does the letter A represent on the number line?







- (A) $\frac{1}{4}$
- (B) $\frac{2}{4}$
- (C) $\frac{3}{4}$
- (D) 1

Test
3

Practice Test

20

The pictograph shows the number of movies of all types that Brenda saw last year.

Movies Brenda Saw	
Action	
Animated	
Comedy	
Drama	

Each  represents 2 movies

Part A

How many more Comedy movies did Brenda see than Animated and Action combined?

Part B

Use what you know about pictographs to explain how you determined your answer. Use words, numbers, and/or symbols in your explanation.

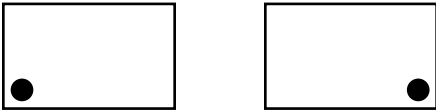


Practice Test

Test
3

21

Which best describes the transformation below?



- (A) flip
- (B) slide
- (C) symmetry
- (D) turn

23

Lilly's house number is 35. Kim's house number is 78. David's house number is 50, and Brett's house number is 63. How many of them have odd house numbers?

- (A) 1
- (B) 2
- (C) 3
- (D) 4

22

A basketball hoop is 10 feet tall. Which measure is equivalent to its height?

- (F) 3 yards
- (G) 3 yards 1 foot
- (H) 3 yards 2 feet
- (J) 4 yards

GO ON