

Test
1

Practice Test

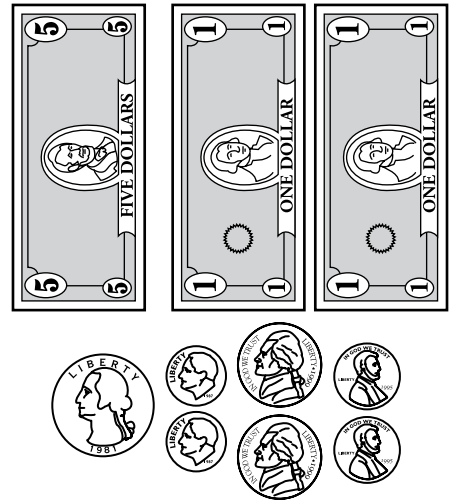
26

How is 490 written in expanded form?

- (F) $40 + 9$
- (G) $400 + 9$
- (H) $400 + 90$
- (J) $400 + 90 + 9$

27

Nicole has the following bills and coins in her purse.



How much money does she have?

- (A) \$6.57
- (B) \$7.47
- (C) \$7.52
- (D) \$7.57




Practice Test

**Test
1**

28

Kyle is playing a game with a spinner. The spinner is shown below.



What can be said about the spinner?

- (F) 2 is more likely than 3.
- (G) 2 is less likely than 1.
- (H) 3 is more likely than 2.
- (J) All of the numbers are equally likely.


29

Johnny has 18 CDs in his collection. His grandmother bought him 3 more CDs. Which expression represents how many CDs Johnny has now?

- (A) $18 + 3$
- (B) $18 - 3$
- (C) $18 \div 3$
- (D) 18×3

30

Look at the quadrilateral below.



How can the quadrilateral best be described?

- (F) Rectangle
- (G) Parallelogram
- (H) Square
- (J) Trapezoid

GO ON